



## Textiles [Y8] - Numeracy Key Skills (1)

Measure the lengths shown on these objects.



### Estimating even stitch sizes


Put these patterns in order from the pattern with the most uneven stitching to the pattern with the most even stitching.



A



B



C



D



E

Most uneven stitching

Most even stitching



### Seam allowance

- 1) You are making a duvet cover which will measure W135cm x L200cm. You decide on a seam allowance of 1.5 cm. What size pieces of fabric will you need to cut?



- 2) You are making a cushion cover 42.5cm x 42.5 cm. You decide on a seam allowance of 1.7 cm. What size pieces of fabric will you need to cut? Give your answers in millimetres.

